

Submit to Gradescope by 11:59PM,
Wednesday, March 25

ME 274 - Quiz08b
Spring 2026 - 9:30 class

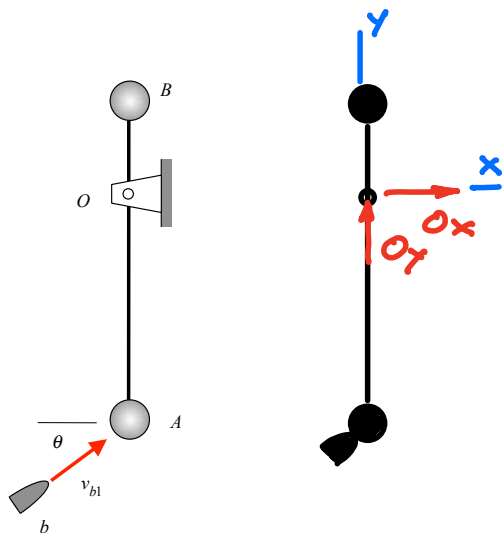
Name SOLUTION

Question 8.3

Particles A and B are attached to a rigid bar with the bar being pinned to ground at point O. A bullet b strikes particle A and sticks. Consider a system made up of b, A, B and the rod. Circle all answers below that correctly describe this system during impact.

- (a) linear momentum is conserved
- (b) angular momentum about A is conserved
- (c) angular momentum about O is conserved**
- (d) energy is conserved
- (e) none of the above

- (a) $\Sigma F_x \neq 0$
 $\Sigma F_y \neq 0$
- (b) $\Sigma M_A \neq 0$
- (c) $\Sigma M_O = 0$
- (d) $e = 0$ ($e \neq 1$)



Question 8.4

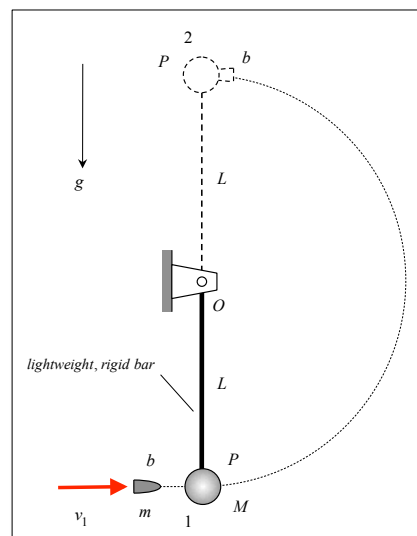
In System A shown below on the left, particle P is connected to a pin joint at O with a lightweight, rigid bar of length L. Bullet b impacts the stationary particle P with a speed of v_1 , and after impact the bullet sticks to P. System B is identical to System A except the rigid bar is replaced by an inextensible string of length L. Let $(v_{1,min})_A$ represent the minimum value of v_1 that is required for particle P in System A to reach position 2, a position where P is at a distance of L immediately above O. Let $(v_{1,min})_B$ represent the minimum value of v_1 that is required for P in System B to reach position 2. Circle the response below that most accurately describes the relative magnitudes of $(v_{1,min})_A$ and $(v_{1,min})_B$:

- (a) $(v_{1,min})_A > (v_{1,min})_B$
- (b) $(v_{1,min})_A = (v_{1,min})_B$
- (c) $(v_{1,min})_A < (v_{1,min})_B$**

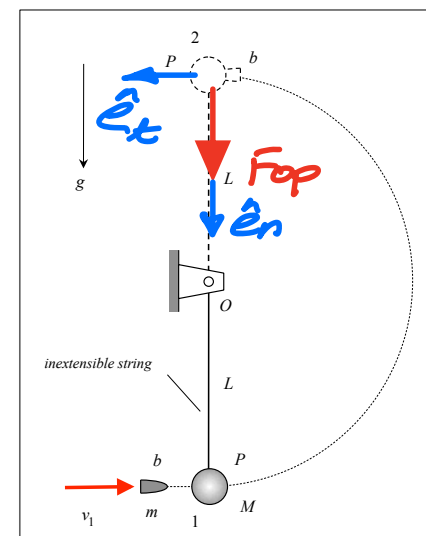
Justify your response with equations and/or words.

$$\Sigma F_n = F_{op} + mg = m\sqrt{v_2^2}$$

$$\hookrightarrow v_{2,min} = \sqrt{Lg}$$



System A



System B

- A: Minimum speed at top = 0
- B: Minimum speed at top = \sqrt{Lg}